

DAWOOD PUBLIC SCHOOL
Summer vacations home work
Mathematics
Class I

Q.1: Write in figures or words.

- 200 _____
- Three hundred _____
- 222 _____
- 040 _____
- One hundred and twenty one _____

Q.2: Solve the following sums.

	T	O
	2	8
+	1	2

	T	O
	3	6
-	1	6

	T	O
	2	8
+	1	0

	T	O
	1	4
+	1	0

Q.3: Solve.

- _____ x 5 = 10
- _____ x 3 = 18
- _____ x 4 = 16
- 4 x _____ = 20

Q.4 Fill in the blanks.


- 5 tens = _____
- 2 tens 9 ones = _____
- 1 tens and 0 ones = _____
- 7 tens and 4 ones = _____

Q.5: Fill in the blanks with 'greater' or 'smaller'.


- 36 is _____ than 64.
- 96 is _____ than 69.
- Seventy seven is _____ than seventeen.
- Twenty nine is _____ than nine.

Q6: Draw hands to show the following time:


1. Half past 7



2. 12 o'clock



3. 4:30



Q7: Draw clocks to show the following time.

1. Half past 2

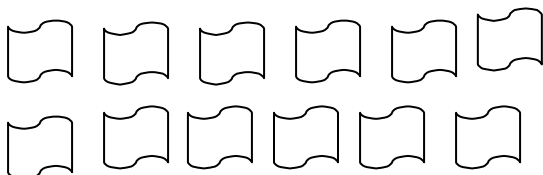
2. 10:30

Q8: Multiply


8	3	7	0
X 4	x 7	x 6	x 2
_____	_____	_____	_____
_____	_____	_____	_____

Q9: SOLVE

- circle into 3 equal groups



- Circle into 5 equal groups.




Q10: Circle:

- Into groups of 6



- Into groups of 7



Q11. Solve the following blanks.

1. _____ 4 _____ 8

2. 3 _____ 7 9 _____

3. 3 6 _____ 12

4. 5 10 15 _____ 25 _____

5. 2 5 8 _____ 14

6. 2 5 8 11 _____

7. 14 12 10 _____ 6

8. 0 4 9 15 _____

Q12. Learn tables from 2-6

Q13: Draw a picture with the help of different shapes and colours by cutting them on glaze paper and paste them on a piece of chart paper.
